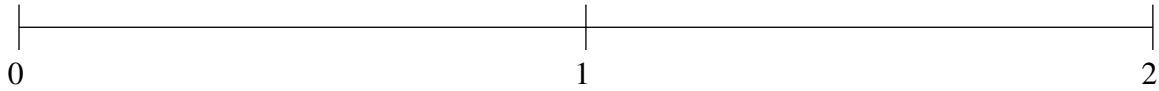


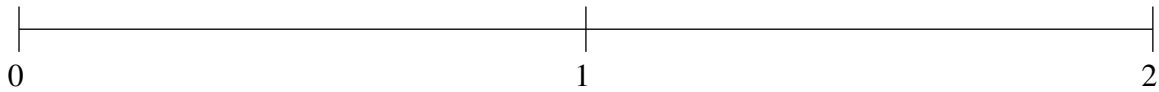
Ordering Fractions (D)

Order each set of fractions using the number line.

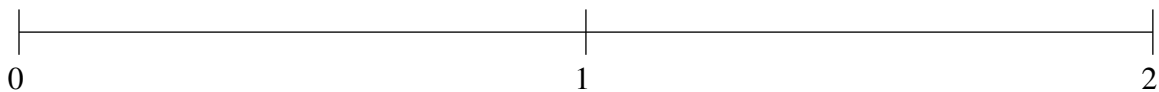
$$1\frac{1}{5}, \frac{1}{10}, \frac{1}{2}, 1\frac{1}{2}, \frac{4}{5}$$



$$1\frac{4}{5}, \frac{1}{2}, \frac{4}{5}, \frac{1}{5}, 1\frac{1}{2}$$



$$1\frac{4}{5}, 1\frac{1}{5}, 1\frac{1}{2}, \frac{4}{5}, \frac{2}{5}$$



Ordering Fractions (D) Answers

Order each set of fractions using the number line.

$$1\frac{1}{5}, \frac{1}{10}, \frac{1}{2}, 1\frac{1}{2}, \frac{4}{5}$$

$$\frac{1}{10}, \frac{1}{2}, \frac{4}{5}, 1\frac{1}{5}, 1\frac{1}{2}$$



$$1\frac{4}{5}, \frac{1}{2}, \frac{4}{5}, \frac{1}{5}, 1\frac{1}{2}$$

$$\frac{1}{5}, \frac{1}{2}, \frac{4}{5}, 1\frac{1}{2}, 1\frac{4}{5}$$



$$1\frac{4}{5}, 1\frac{1}{5}, 1\frac{1}{2}, \frac{4}{5}, \frac{2}{5}$$

$$\frac{2}{5}, \frac{4}{5}, 1\frac{1}{5}, 1\frac{1}{2}, 1\frac{4}{5}$$

