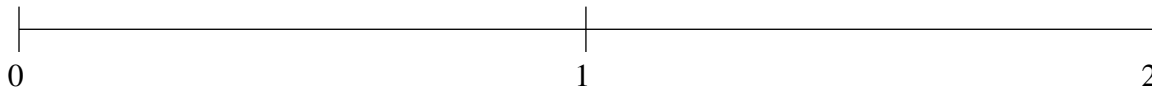


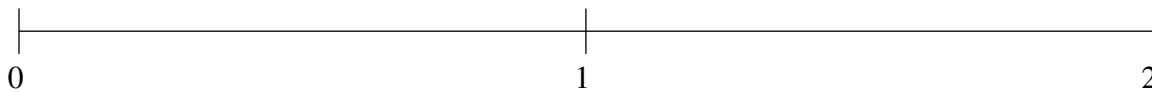
Ordering Fractions (E)

Order each set of fractions using the number line.

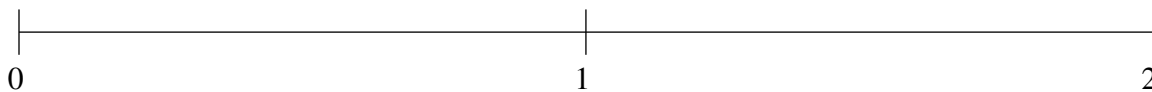
$$1\frac{1}{5}, \frac{9}{10}, \frac{1}{2}, 1\frac{1}{2}, \frac{1}{5}$$



$$\frac{1}{5}, 1\frac{1}{2}, 1\frac{4}{5}, \frac{4}{5}, \frac{1}{2}$$



$$\frac{1}{5}, 1\frac{1}{2}, 1\frac{4}{5}, \frac{1}{2}, 1\frac{1}{10}$$

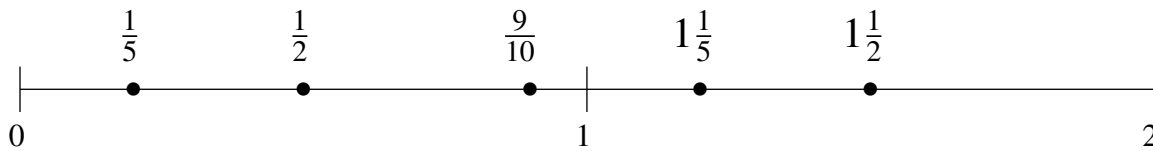


Ordering Fractions (E) Answers

Order each set of fractions using the number line.

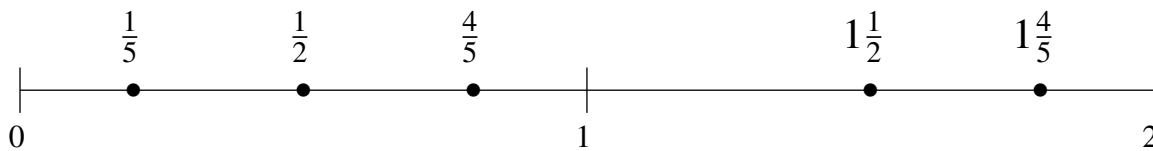
$$1\frac{1}{5}, \frac{9}{10}, \frac{1}{2}, 1\frac{1}{2}, \frac{1}{5}$$

$$\frac{1}{5}, \frac{1}{2}, \frac{9}{10}, 1\frac{1}{5}, 1\frac{1}{2}$$



$$\frac{1}{5}, 1\frac{1}{2}, 1\frac{4}{5}, \frac{4}{5}, \frac{1}{2}$$

$$\frac{1}{5}, \frac{1}{2}, \frac{4}{5}, 1\frac{1}{2}, 1\frac{4}{5}$$



$$\frac{1}{5}, 1\frac{1}{2}, 1\frac{4}{5}, \frac{1}{2}, 1\frac{1}{10}$$

$$\frac{1}{5}, \frac{1}{2}, 1\frac{1}{10}, 1\frac{1}{2}, 1\frac{4}{5}$$

